

4

TIME

White
Rose
Maths



From White Rose Maths schemes for Year 4 Summer Term
BLOCK 3 - TIME

1 Match the analogue and digital clocks.




2 Complete the table.

Month	Number of days
April	
	28 or 29
December	


- 3 Jack sets off to the shop at twenty-five past ten.

He arrives at the shop 25 minutes later.

Draw the times on the clock faces.



sets off



arrives

- 4 Label the number line to show where each amount belongs.

One has been done for you.

A

days in
June

B

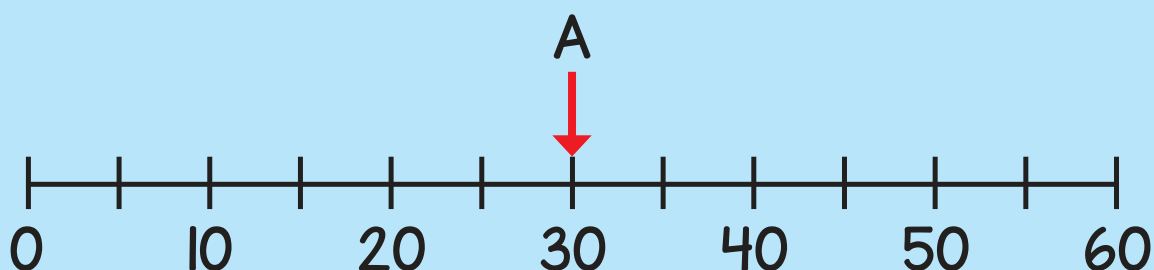
seconds
in a minute

C

hours in
a day

D

days in
5 weeks



- 5 Tick the times that match the time shown on the digital clock.



quarter to eight
in the evening


7:45 pm

7:45 am

9:45 pm


- 6 A machine makes one gadget every 30 seconds.
How many gadgets does it make in 8 minutes?

- 7 Eva and Mo both walk 10 km.



Eva

I took 205 minutes.



Mo

I took 3 hours and 45 minutes.

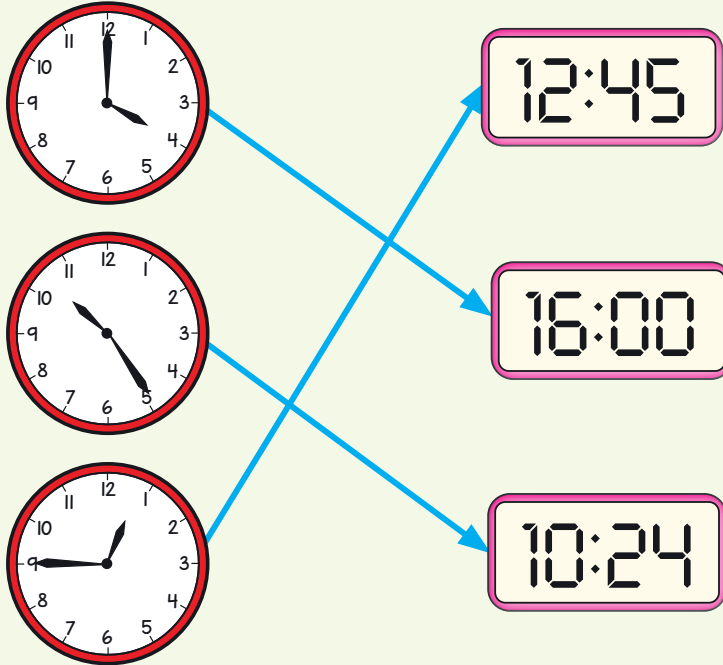
Who took longer?

How much longer?

Answers




1



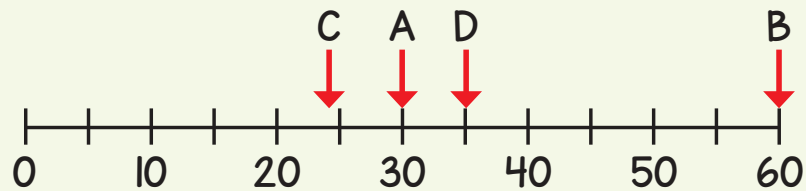
2

Month	Number of days
April	30
February	28 or 29
December	31

3



4



5

quarter to eight
in the evening ✓

7:45 pm ✓

6

16 gadgets

7

Mo took longer.

He took 20 minutes longer.