


3

MULTIPLICATION AND DIVISION (2)



- 1 Use the array to complete the number sentences.



$$\square \times \square = \square$$

$$\square \times \square = \square$$


$$\square \div \square = \square$$

$$\square \div \square = \square$$

- 2 A shop has 32 apples.

They are put into 4 equal groups.

How many apples are in each group?



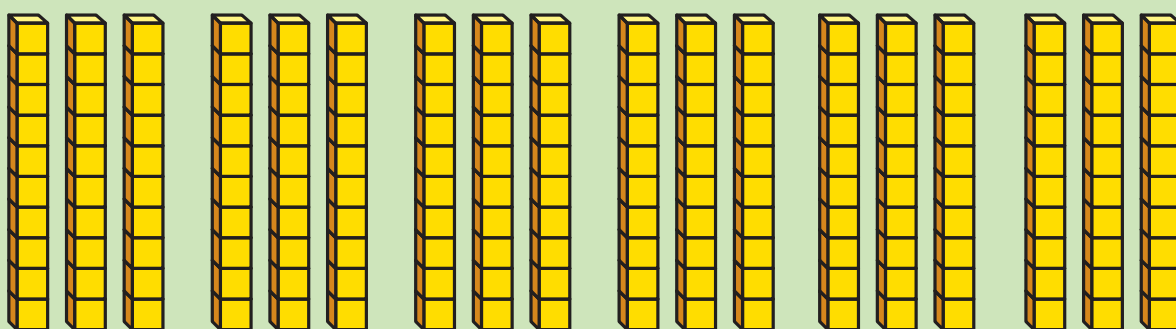
apples

3 Work out the calculations.

Use the diagrams to help you.



$$6 \times 3 = \boxed{}$$



$$6 \times 30 = \boxed{}$$


4 Complete the calculation.

Tens	Ones

		T	0	
		I	2	
	x		4	

- 5 There are 5 jars of sweets.

Each jar has 18 sweets.



How many sweets are there **altogether**?

		T	0	
	x			



sweets


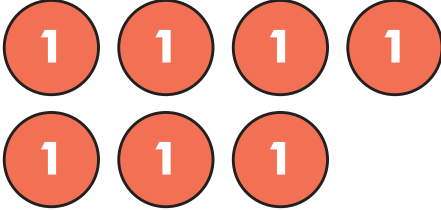

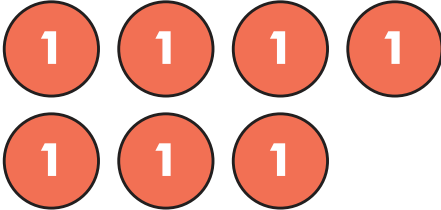




- 6 Eva has calculated
 23×3

Her answer is 609

Explain her mistake.

		T	0	
		2	3	
	x		3	
	6	0	9	

7 Work out 47×4


Tens	Ones
	
	
	
	

8

Calculate $64 \div 2 =$



Use the place value chart to help you.

Tens	Ones
<div>10</div> <div>10</div> <div>10</div>	<div>1</div> <div>1</div>
<div>10</div> <div>10</div> <div>10</div>	<div>1</div> <div>1</div>

Calculate $69 \div 3 =$ 

Tens	Ones

- 9 Amir makes groups of 4 gummy bears.



He makes 9 groups and has 3 bears left over.

How many gummy bears does he have altogether?

- 10 There are 16 green cubes in a box.

There are 4 times as many blue cubes than green cubes in the box.

How many cubes are there **altogether**?

Answers



1 $4 \times 5 = 20$

$$5 \times 4 = 20$$

$$20 \div 5 = 4$$

$$20 \div 4 = 5$$

2 8 apples

3 $6 \times 3 = 18$

$$6 \times 30 = 180$$

4

		T	0	
		I	2	
	x		4	
		4	8	

5

		T	0	
		I	8	
	x		5	
		9	0	

90 sweets

6 3×2 tens is 6 tens. The 6 should be in the tens column.

7 $4 \times 7 = 28$
 $4 \times 40 = 160$
 $160 + 28 = 188$

8 $64 \div 2 = 32$
 $69 \div 3 = 23$

9 39 gummy bears

10 80 cubes