

2


TIME

White  
Rose  
Maths




From White Rose Maths schemes for Year 2 Summer Term  
**BLOCK 2 - TIME**


1 Match the clocks to the times.




9 o'clock



half past 9



half past 12







6 o'clock

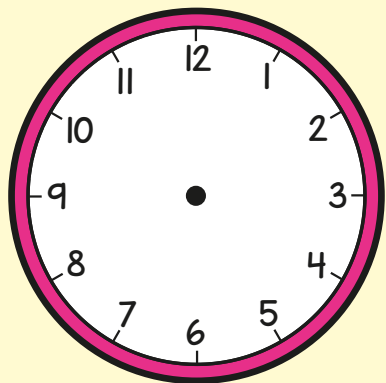

- 2 Write the times shown on the clocks.  
Use the word bank to help you.

quarter past


quarter to



- 3 Draw the hands on the clocks to show the times.




ten past 8




twenty-five to 4

- 4 A machine fills one box every minute.  
How many boxes does it fill in half  
an hour?



boxes

- 5 Order the times from shortest to longest.



quarter of an hour

half an hour

25 minutes

10 minutes

shortest

---


---

---


longest

---

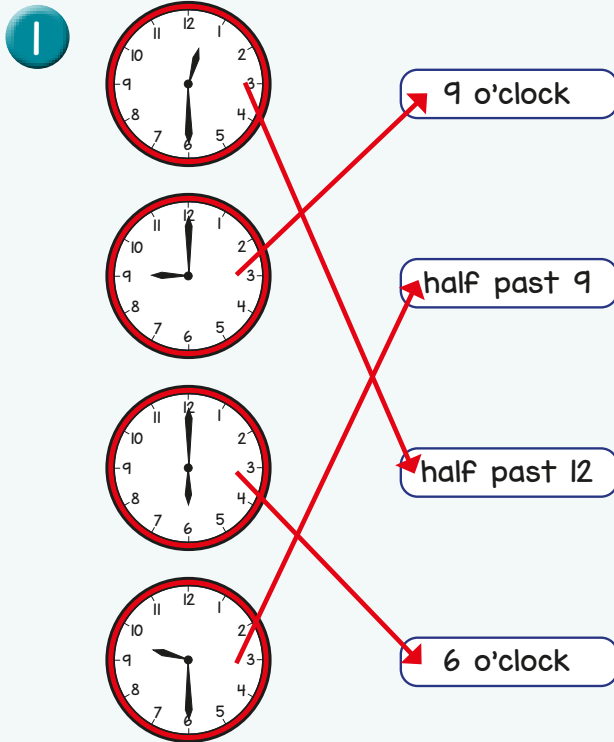





Rosie sets off to school at 25 past 8  
She arrives at school at quarter to 9  
How long was Rosie's journey?

A large, empty rectangular box with a light blue border and rounded corners, intended for the student to write their answer to the problem.

# Answers



- 2 quarter past 7  
quarter to 7  
quarter past 9



- 4 30 boxes
- 5 10 minutes  
quarter of an hour  
25 minutes  
half an hour
- 6 20 minutes

