



TIME

White
Rose
Maths




From White Rose Maths schemes for Year 1 Summer Term


BLOCK 6 - TIME




Match the clocks to the times.



eight o'clock




six o'clock



one o'clock

2

Tick the time shown on the clock.



six o'clock

half past three

three o'clock

3

Circle to show when each activity happens.



breakfast

morning

evening



go to school

morning

evening




bedtime

morning

evening

4 Fill in the missing days of the week.

Wednesday



Thursday

Saturday

Sunday




Tuesday

5

Today is Monday.

Dan went to the zoo yesterday.

What day did Dan go to the zoo?



Dan went to the zoo on _____

6

Use the word bank to help you complete the sentences.

minutes


seconds

hours


Playtime lasts for about 15 _____

I can count to 10 in less than 5 _____


7 This is what Sam does on Saturday.



watch TV - **one hour**



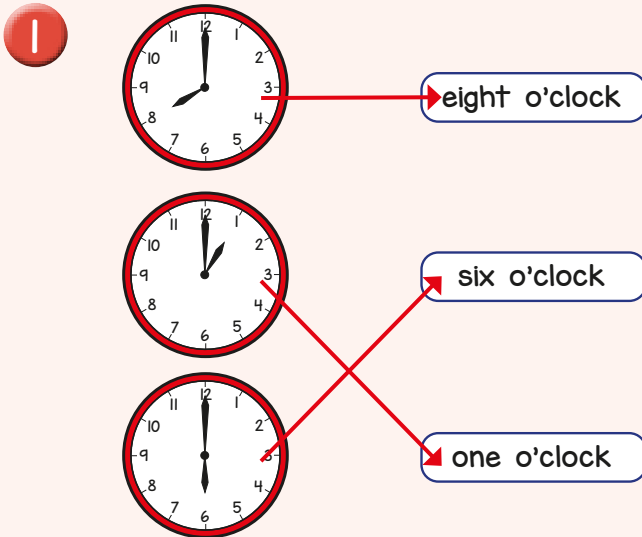
ride her bike - **2 hours**



walk the dog - **30 minutes**

Circle the activity that takes the longest time.

Answers



2 half past three ✓

3 morning
morning
evening

4 Friday
Monday

5 Dan went to the zoo on Sunday.

6 Playtime lasts for about 15 minutes
I can count to 10 in less than 5 seconds

7 ride her bike - 2 hours