



MASS AND CAPACITY

White
Rose
Maths



From White Rose Maths schemes for Year 1 Spring Term
BLOCK 4 - MASS AND CAPACITY


1 Choose a word to complete each sentence.

heavier

lighter




The bat is _____ than the ball.



The plane is _____ than the bear.

2 Tick the correct sentences.



The melon is heavier than 3 apples.

☐

The melon weighs the same as 3 apples.


☐

.


The melon is heavier than 1 apple.

☐


3 Colour the glasses to match each label.



almost empty

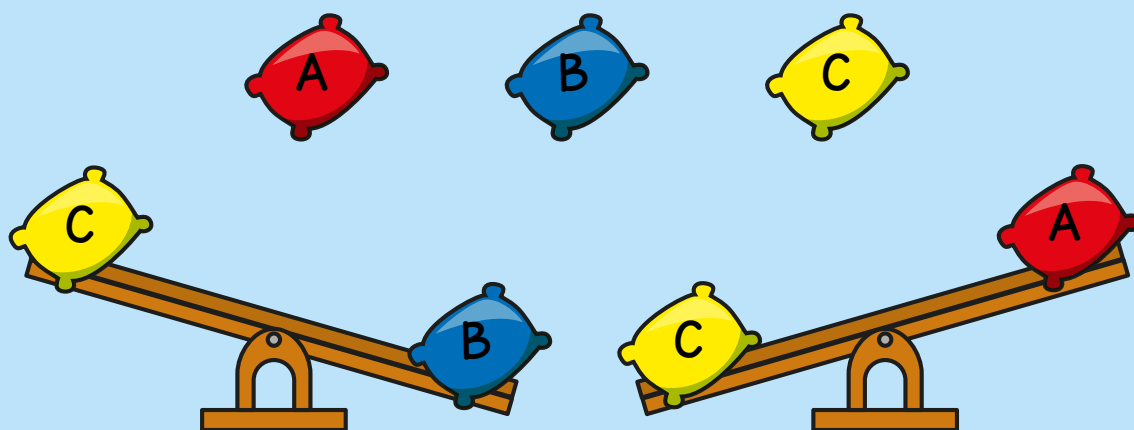


full



almost full

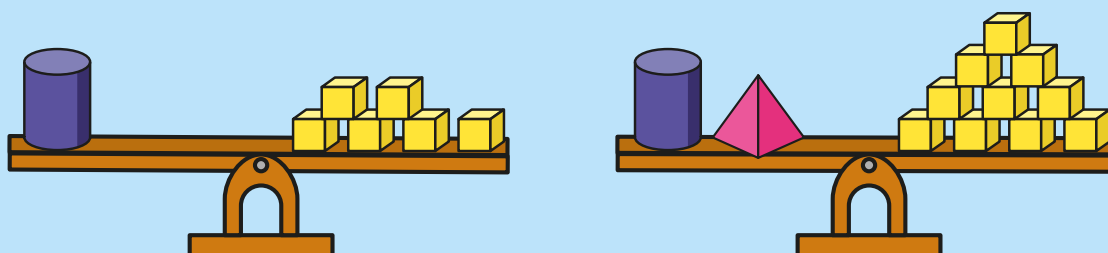
- 4 Alex is weighing beanbags.



Which beanbag is the heaviest? _____

Which beanbag is the lightest? _____

5

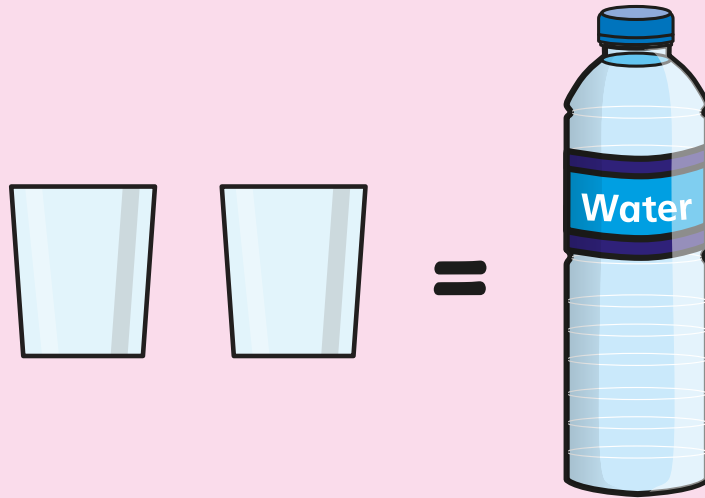


What is the mass of the cylinder?

cubes

What is the mass of the pyramid?

6 It takes 2 glasses to fill 1 bottle.



How many glasses will it take to fill
2 bottles?


glasses

How many glasses will it take to fill
3 bottles?

glasses

How many glasses can be filled with
4 bottles?

glasses

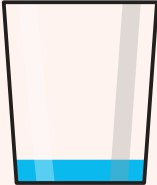


Answers




- 1 The bat is **lighter** than the ball.
The plane is **lighter** than the bear.


- 2 The melon weighs the same as 3 apples. ☒
The melon is heavier than 1 apple. ☒

- 3
- 

almost empty



full



almost full

- 4 B
A

- 5 6 cubes
4 cubes

- 6 4 glasses
6 glasses
8 glasses

